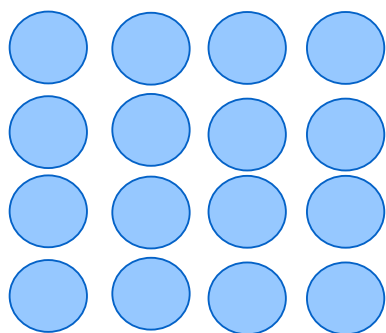




Multiplication sentences and arrays

Grade 3 Multiplication Worksheet

Write a multiplication equation to find the number of shapes.




$$\square \times \square = \square$$




$$\square \times \square = \square$$




$$\square \times \square = \square$$



$$\square \times \square = \square$$



$$\square \times \square = \square$$



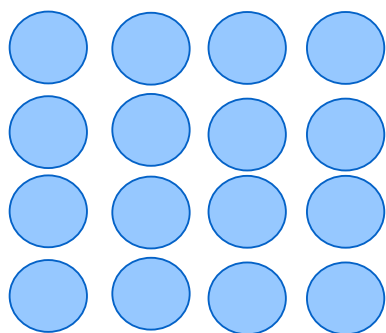
$$\square \times \square = \square$$



Multiplication sentences and arrays

Grade 3 Multiplication Worksheet

Write a multiplication equation to find the number of shapes.



$$4 \times 4 = 16$$




$$1 \times 5 = 5 \text{ or;}$$

$$5 \times 1 = 5$$




$$2 \times 6 = 12 \text{ or;}$$

$$6 \times 2 = 12$$




$$4 \times 3 = 12 \text{ or;}$$

$$3 \times 4 = 12$$



$$3 \times 7 = 21 \text{ or;}$$

$$7 \times 3 = 21$$



$$5 \times 6 = 30 \text{ or;}$$

$$6 \times 5 = 30$$